



Little Rose Academy High School Primary Wing (2025-2026)

Summer

Break

**ALL WORK AND NO PLAY
MAKES JACK A DULL BOY,
IT'S YOUR TIME TO GO AND PLAY. HAVE A RELAXING
AND PLAYFUL SUMMER DEAR STUDENTS. MAY YOUR
SUMMER VACATION BE A SYMPHONY OF CREATIVITY,
EACH DAY BRINGING NEW MELODIES OF INSPIRATION
AND EXPRESSIONS**



English

Answer the following in one word:

1. Who are waiting for their turn to meet the teacher?
2. To save drowning ant what does Pranav made with his report card?
3. Who made a soft warm nest on Pranav 's report card?
4. Who was his teacher?
5. What does mummy want to make with green chillies and coconut?

Fill in the blanks to complete these sentences:

1. Mummy tells me to my bed after I wake up.
2. She a visit to her grandma every month.
3. We need to the bus at 11:50 am
4. He ready for school on time.

Write the plural of the following:

Ant , pigeon, brush , class , torch , glass , coin,teacher,boy,match

Write the correct word to form similes:

1. Anna sings like a.....
2. Hemant swims like a.....
3. Mani runs swiftly like a
4. The dress is colourful like a.....
5. Tara's silver hairband twinkles like a

Note: write one writing page daily on separate notebook.



Environmental Science

1. Which sense organ help us to see?
2. Which sense organ help us to feel?
3. Which sense organ help us to hear?
4. Which sense organ help us to smell?
5. Which sense organ help us to taste?
6. Name the food items that we get from plants.
7. Name the food items that we get from animals.
8. Where do we get food from?
9. Is junk food good for our health?
10. Name the food items that we eat during festivals.

Note : Make a model on healthy and unhealthy food.

HAPPY VACATIONS



Two-Digit Addition #2

Maths

Name: _____

A

$$\begin{array}{r} 88 \\ + 55 \\ \hline \end{array}$$

B

$$\begin{array}{r} 11 \\ + 44 \\ \hline \end{array}$$

C

$$\begin{array}{r} 66 \\ + 77 \\ \hline \end{array}$$

D

$$\begin{array}{r} 22 \\ + 55 \\ \hline \end{array}$$

E

$$\begin{array}{r} 99 \\ + 99 \\ \hline \end{array}$$

F

$$\begin{array}{r} 33 \\ + 55 \\ \hline \end{array}$$

G

$$\begin{array}{r} 22 \\ + 22 \\ \hline \end{array}$$

H

$$\begin{array}{r} 00 \\ + 99 \\ \hline \end{array}$$

I

$$\begin{array}{r} 88 \\ + 77 \\ \hline \end{array}$$

J

$$\begin{array}{r} 22 \\ + 11 \\ \hline \end{array}$$

K

$$\begin{array}{r} 33 \\ + 44 \\ \hline \end{array}$$

L

$$\begin{array}{r} 88 \\ + 88 \\ \hline \end{array}$$

M

$$\begin{array}{r} 55 \\ + 11 \\ \hline \end{array}$$

N

$$\begin{array}{r} 99 \\ + 33 \\ \hline \end{array}$$

O

$$\begin{array}{r} 77 \\ + 99 \\ \hline \end{array}$$

P

$$\begin{array}{r} 77 \\ + 55 \\ \hline \end{array}$$

Q

$$\begin{array}{r} 11 \\ + 11 \\ \hline \end{array}$$

R

$$\begin{array}{r} 88 \\ + 44 \\ \hline \end{array}$$

S

$$\begin{array}{r} 99 \\ + 22 \\ \hline \end{array}$$

T

$$\begin{array}{r} 77 \\ + 33 \\ \hline \end{array}$$

2-Digit Subtraction Practice

Solve each 2-digit subtraction problem and write your answer in the box. Take your time and try your best!

1

$$\begin{array}{r} 78 \\ - 32 \\ \hline \end{array}$$

2

$$\begin{array}{r} 54 \\ - 27 \\ \hline \end{array}$$

3

$$\begin{array}{r} 63 \\ - 15 \\ \hline \end{array}$$

4

$$\begin{array}{r} 91 \\ - 46 \\ \hline \end{array}$$

5

$$\begin{array}{r} 82 \\ - 24 \\ \hline \end{array}$$

6

$$\begin{array}{r} 59 \\ - 31 \\ \hline \end{array}$$

7

$$\begin{array}{r} 76 \\ - 48 \\ \hline \end{array}$$

8

$$\begin{array}{r} 43 \\ - 19 \\ \hline \end{array}$$

9

$$\begin{array}{r} 87 \\ - 56 \\ \hline \end{array}$$

10

$$\begin{array}{r} 95 \\ - 73 \\ \hline \end{array}$$

11

$$\begin{array}{r} 68 \\ - 34 \\ \hline \end{array}$$

12

$$\begin{array}{r} 81 \\ - 29 \\ \hline \end{array}$$

13

$$\begin{array}{r} 74 \\ - 58 \\ \hline \end{array}$$

14

$$\begin{array}{r} 62 \\ - 17 \\ \hline \end{array}$$

15

$$\begin{array}{r} 53 \\ - 21 \\ \hline \end{array}$$

16


$$\begin{array}{r} 88 \\ - 49 \\ \hline \end{array}$$

खेत के जानवर

समझबूझ कर पढ़ना

निर्देश: नीचे दिए गए गद्यांश को पढ़ें। कहानी के आधार पर दिए गए प्रश्नों के उत्तर एक लाइन में दीजिए।

गायें खेत के जानवर हैं।
वे घास और पत्ते खाते हैं।
गायों की आंखें बड़ी होती हैं और
कोमल होती हैं।
युवा गाय को बछड़ा कहा जाता है।
गायें लोगों को दूध देती हैं।
भारत के लोग गायों की अपनी
माता मानते हैं।



1 युवा गाय को क्या कहते हैं?

2 गायें हमें क्या देती हैं?

3 गायें क्या खाती हैं?

प्र-1 दिए गए शब्दों के विपरीत शब्द छांटे -

काला	कल	गंदा
ठंडा	रात	शाम

सुबह - _____

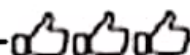
आज - _____

गर्म - _____

सफ़ेद - _____

साफ़ - _____

संज्ञा: रिक्त स्थान भरें

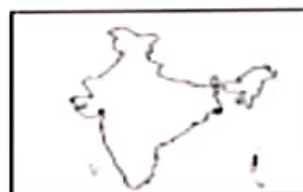


नीचे दिए गए रिक्त स्थान में सही संज्ञा शब्द भरें।

1. _____ फलों का राजा है।



2. मेरे देश का नाम _____ है।



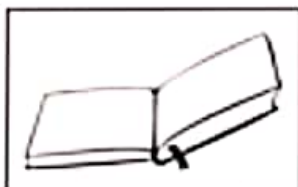
3. यह _____ है।

4. यह _____ का फूल है।



5. यह एक _____ है।

6. माँ ने आज लाल रंग की _____ पहनी है।



वचन



करिश्मा _____ पढ़ रही है।

मेज़ पर _____ पड़ी हैं।



मदन _____ खा रहा है।

टोकरी में _____ रखे हैं।

प्र०1 खाली स्थान में उचित शब्द लिखिए:-

क) _____ पर बकरियाँ घास चर रही थीं। (पहाड़ी / पहाड़ियाँ)

ख) भारत में चार प्रकार की _____ पाई जाती हैं।

(ऋतुएँ / ऋतु)

ग) मदन ने मंदिर की सारी _____ दौड़कर चढ़ ली।

(सीढ़ी / सीढ़ियाँ)

घ) _____ चहचहा रहा है। (पक्षी / पक्षीवृंद)

ङ) बैलगाड़ी का _____ निकल गया। (पहिया / पहिये)

Note: प्रतिदिन एक पेज सुलेख लिखे

Computer Basics

Fill in the blanks with the correct answers.

1. _____ is the brain of a computer.
2. We use a _____ to type on computer.
3. A _____ helps us to connect to the internet.
4. A computer is an _____ machine that can process information.
5. The _____ is the screen where we see the output.
6. A _____ is used to point and click on the screen.
7. We can use a computer to _____ pictures and drawings.
8. The _____ is the main part of the computer.
9. We can listen to _____ on the computer.
10. _____ are short, fun programs on the computer.
11. Keyboard helps you to give _____ to the computer.
12. _____ looks like a television screen.
13. Computers help us to _____ information.
14. A _____ is a small picture on the computer screen.
15. We can use a computer to _____ with our friends and family.





OBJECTS RECOGNISATION



MATCH THE FOLLOWING MUSICAL INSTRUMENTS WITH THEIR NAMES BY DRAWING LINES



Piano

Tuba

Drums

Sitar

Accordin

Flute

Tabla

Guitar



ANIMALS AND THEIR SURROUNDINGS

MATCH ANIMALS WITH THEIR HOME



Hippopotamus



Cave



Elephant



Grasslands



Alligator



Forest



Zebra



Marshes



Bear



Lake



OUR PROFESSION



MATCH THE IMAGES ON THE LEFT TO THEIR CORRESPONDING IMAGE ON THE RIGHT





Project Time

English: Prepare chart on singular and plural

EVS : Make a model on healthy and unhealthy food

Maths : Make a chart on different shapes using match sticks

Hindi : संज्ञा पर चार्ट बनाए।

Computer : Make a model on any part of Computer

Wishing you a *Great Vacation.*
Hope your vacation is the greatest, & may
each new day bring you happy memories
to cherish when you get back!
*Have a Wonderful
Time!*

